

Write your name here

Surname

Other names

Pearson Edexcel Certificate

Centre Number

Candidate Number

**Pearson Edexcel
International GCSE**

--	--	--	--	--

--	--	--	--

Chemistry

Unit: KCH0/4CH0

Paper: 2C

Friday 16 January 2015 – Morning

Time: 1 hour

Paper Reference

**KCH0/2C
4CH0/2C**

You must have:

Calculator

Total Marks

Instructions

- Use **black** ink or ball-point pen.
- **Fill in the boxes** at the top of this page with your name, centre number and candidate number.
- Answer **all** questions.
- Answer the questions in the spaces provided – *there may be more space than you need.*
- Show all the steps in any calculations and state the units.
- Some questions must be answered with a cross in a box ☒. If you change your mind about an answer, put a line through the box ☒ and then mark your new answer with a cross ☒.

Information

- The total mark for this paper is 60.
- The marks for **each** question are shown in brackets – *use this as a guide as to how much time to spend on each question.*

Advice

- Read each question carefully before you start to answer it.
- Keep an eye on the time.
- Write your answers neatly and in good English.
- Try to answer every question.
- Check your answers if you have time at the end.

Turn over ►

P44255A

©2015 Pearson Education Ltd.

1/1/1/1/



PEARSON

THE PERIODIC TABLE

Period 1 2 3 4 5 6 7 0

1	Group																4																																																																																																																																																																																																																																																																																																																																																																																																																																																																																																
1	H Hydrogen 1																2																																																																																																																																																																																																																																																																																																																																																																																																																																																																																																
2	7	9	11	13	15	17	19	21	23	25	27	29	31	33	35	37	39	41	43	45	47	49	51	53	55	57	59	61	63	65	67	69	71	73	75	77	79	81	83	85	87	89	91	93	95	97	99	101	103	105	107	109	111	113	115	117	119	121	123	125	127	129	131	133	135	137	139	141	143	145	147	149	151	153	155	157	159	161	163	165	167	169	171	173	175	177	179	181	183	185	187	189	191	193	195	197	199	201	203	205	207	209	211	213	215	217	219	221	223	225	227	229	231	233	235	237	239	241	243	245	247	249	251	253	255	257	259	261	263	265	267	269	271	273	275	277	279	281	283	285	287	289	291	293	295	297	299	301	303	305	307	309	311	313	315	317	319	321	323	325	327	329	331	333	335	337	339	341	343	345	347	349	351	353	355	357	359	361	363	365	367	369	371	373	375	377	379	381	383	385	387	389	391	393	395	397	399	401	403	405	407	409	411	413	415	417	419	421	423	425	427	429	431	433	435	437	439	441	443	445	447	449	451	453	455	457	459	461	463	465	467	469	471	473	475	477	479	481	483	485	487	489	491	493	495	497	499	501	503	505	507	509	511	513	515	517	519	521	523	525	527	529	531	533	535	537	539	541	543	545	547	549	551	553	555	557	559	561	563	565	567	569	571	573	575	577	579	581	583	585	587	589	591	593	595	597	599	601	603	605	607	609	611	613	615	617	619	621	623	625	627	629	631	633	635	637	639	641	643	645	647	649	651	653	655	657	659	661	663	665	667	669	671	673	675	677	679	681	683	685	687	689	691	693	695	697	699	701	703	705	707	709	711	713	715	717	719	721	723	725	727	729	731	733	735	737	739	741	743	745	747	749	751	753	755	757	759	761	763	765	767	769	771	773	775	777	779	781	783	785	787	789	791	793	795	797	799	801	803	805	807	809	811	813	815	817	819	821	823	825	827	829	831	833	835	837	839	841	843	845	847	849	851	853	855	857	859	861	863	865	867	869	871	873	875	877	879	881	883	885	887	889	891	893	895	897	899	901	903	905	907	909	911	913	915	917	919	921	923	925	927	929	931	933	935	937	939	941	943	945	947	949	951	953	955	957	959	961	963	965	967	969	971	973	975	977	979	981	983	985	987	989	991	993	995	997	999

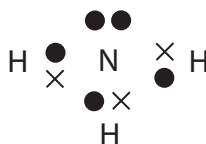
Key

Relative atomic mass
Symbol
Name
Atomic number



Answer ALL questions.

1 The diagram represents a particle of ammonia.



(a) This particle of ammonia is

(1)

- A** an atom
- B** an ion
- C** a lattice
- D** a molecule

(b) Which type of bonding is present in this particle of ammonia?

(1)

- A** covalent
- B** hydrogen
- C** ionic
- D** metallic

(c) What is the formula of ammonia?

(1)

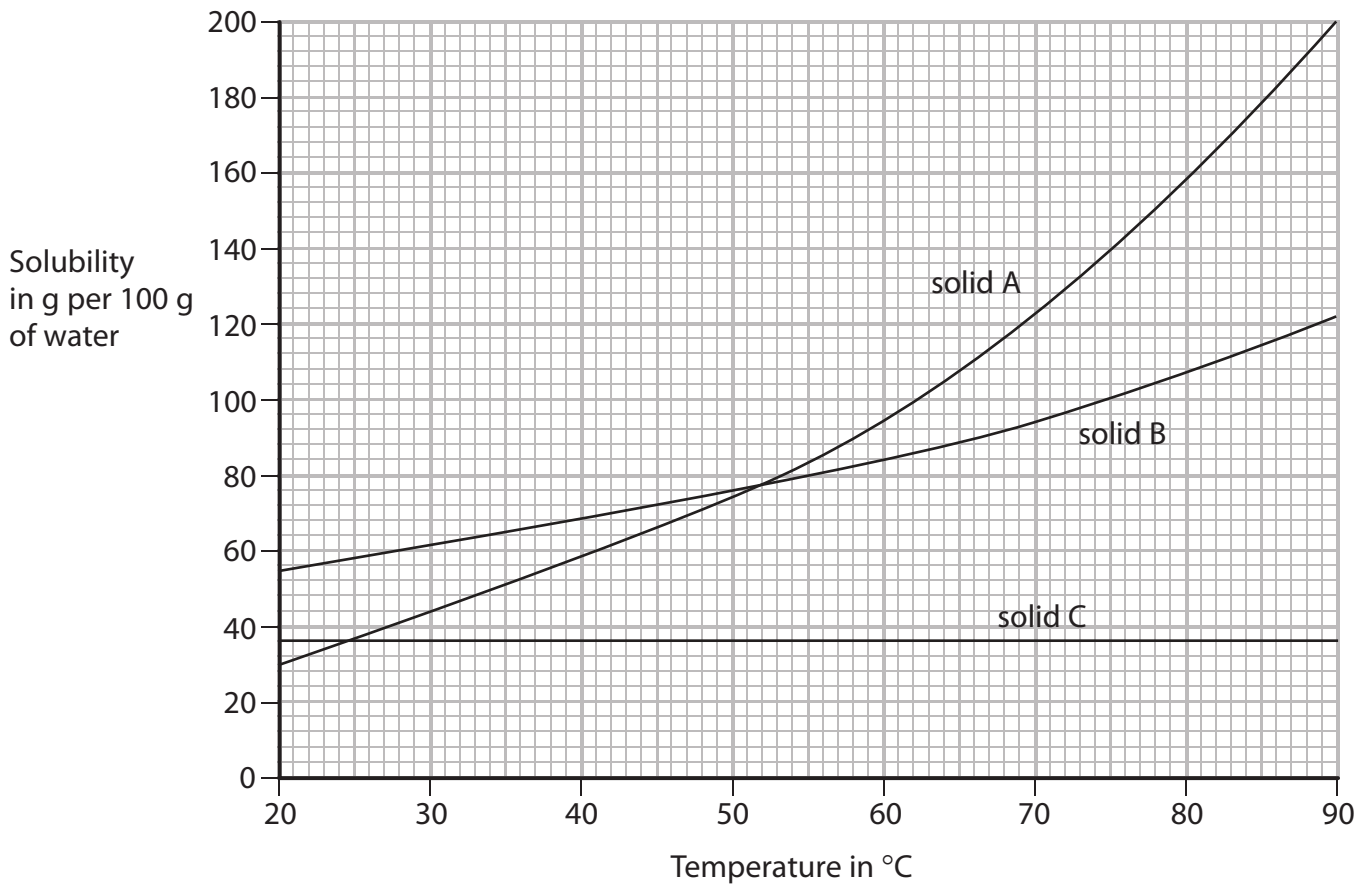
(Total for Question 1 = 3 marks)



2 The solubility of a solid in water is the maximum mass of the solid that can dissolve in 100 g of water at a given temperature.

An aqueous solution containing this maximum mass can be described as a saturated solution.

The graph shows the solubilities of three solids at different temperatures.



(a) (i) What is the relationship between solubility and temperature for solid A?

(1)

(ii) Which solid is the most soluble at 30 °C?

(1)



(b) Explain what you would observe if a saturated solution of solid A were cooled from 90°C to 20°C.

(2)

.....

.....

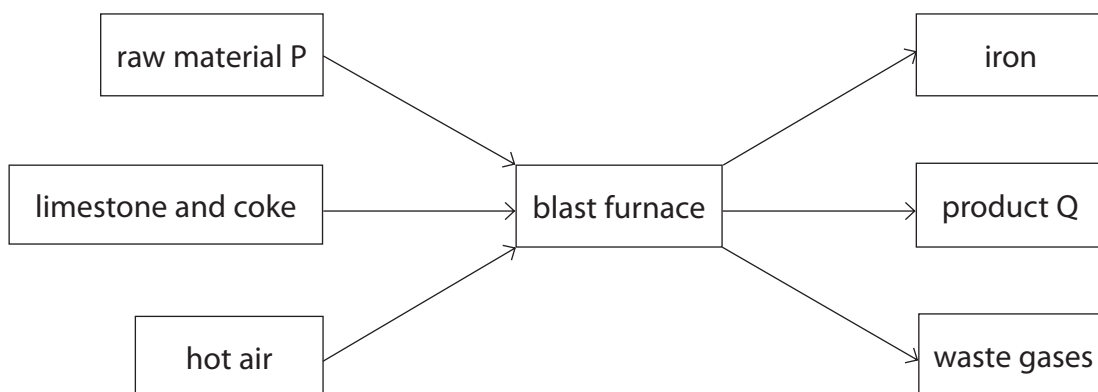
.....

.....

(Total for Question 2 = 4 marks)



3 The diagram shows how iron is produced in a blast furnace.



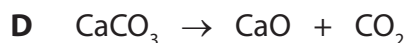

(a) Give the name of raw material P and of product Q.

(2)

raw material P

product Q

(b) The equations for some reactions in a blast furnace are



The table shows some types of reaction that occur in a blast furnace.

Complete the table by writing a letter, A, B, C, D, or E, to link each type of reaction to an appropriate reaction equation.

Each letter may be used once, more than once or not at all.

The first one has been done for you.

(3)

Type of reaction	Letter
one that gives out heat	A
one that is a thermal decomposition	
one that is a neutralisation	
one that forms a poisonous gas	



(c) The rusting of iron objects is a major problem.

Name the two substances needed for iron to rust.

(2)

1

2

(d) The order of reactivity of three metals is

most reactive

zinc

iron

tin

least reactive

Iron objects can be prevented from rusting by coating them with zinc or tin.

Some of these objects may be scratched when used, so the coating may come off.

Use the order of reactivity of the metals to suggest why coating these objects with zinc is more effective than coating them with tin.

(3)

.....

.....

.....

.....

.....

.....

.....

(Total for Question 3 = 10 marks)



4 (a) Wine can be made from grapes.

The grapes are crushed to produce an aqueous solution containing glucose. Yeast is then added to this solution.

The solution is kept at a constant temperature for a period of time. The glucose is converted into ethanol.

(i) Name the process in which glucose is converted into ethanol. (1)

(ii) What is the purpose of the yeast? (1)

(b) Grape vines can be attacked by a fungus that ruins the grapes. The fungus can be killed using Bordeaux mixture, a solid containing copper(II) sulfate and calcium hydroxide.

(i) State a test to show that Bordeaux mixture contains calcium ions. (2)

test for calcium ions

observation

(ii) A sample of Bordeaux mixture is dissolved in water.

Describe separate tests to show that this solution contains copper(II) ions and sulfate ions.

(5)

test for copper(II) ions

observation

test for sulfate ions

observation



- (c) Ethanol can be manufactured by passing a hot mixture of ethene and steam, at a high pressure, over a catalyst.

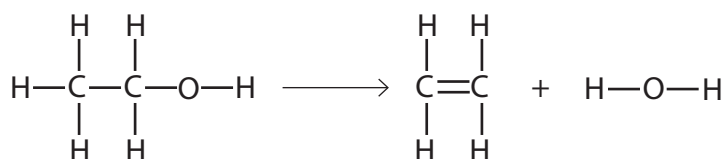
State the pressure used and name the catalyst.

(2)

pressure atm

catalyst

- (d) The equation for the conversion of ethanol into ethene can be written using displayed formulae.



The table gives some average bond energies.

Bond	Average bond energy in kJ/mol
C—C	348
C=C	612
C—H	412
C—O	360
O—H	463

Use information from the table to calculate the enthalpy change, in kJ/mol, for the conversion of ethanol into ethene.

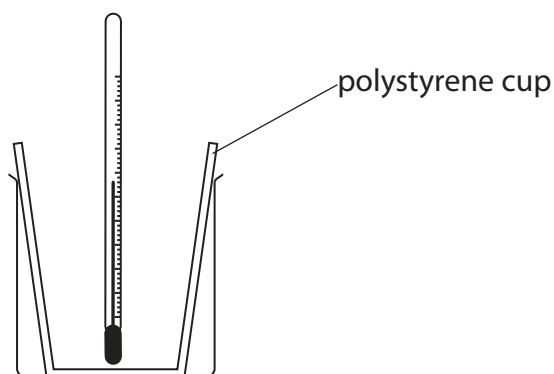
(4)

enthalpy change = kJ/mol

(Total for Question 4 = 15 marks)



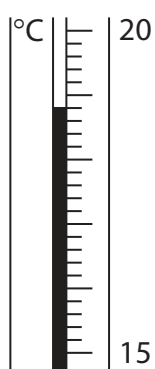
- 5 A student uses this apparatus to investigate the temperature change that occurs when potassium hydroxide is dissolved in water.



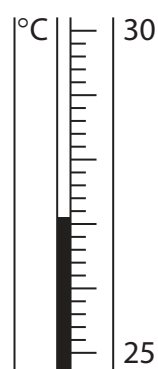
She uses this method.

- pour 50 cm^3 of water into the polystyrene cup and measure the temperature of the water
- add 3 g of potassium hydroxide and stir
- record the highest temperature of the solution

- (a) These diagrams show the thermometer readings before and after the student added the potassium hydroxide.



before



after

Use the readings to complete the table.

(3)

temperature in $^{\circ}\text{C}$ after adding potassium hydroxide	
temperature in $^{\circ}\text{C}$ before adding potassium hydroxide	
temperature change in $^{\circ}\text{C}$	



(b) The student uses her results to calculate the enthalpy change for dissolving potassium hydroxide in water.

She compares her value with a data book value.

Student's value = -32 kJ/mol .

Data book value = -55 kJ/mol .

There are no errors in the student's method or in the calculation.

Suggest two reasons why the student's value differs from the data book value.

(2)

1

.....

.....

2

.....

.....

(Total for Question 5 = 5 marks)



6 Potassium sulfide is an ionic compound.

(a) Complete the table to show the arrangement of electrons in the ions formed when potassium and sulfur react to form potassium sulfide.

Give the charge on each of the ions.

(3)

Element	Arrangement of electrons in atom	Arrangement of electrons in ion	Charge on ion
K	2.8.8.1		
S	2.8.6		

(b) (i) Explain why potassium sulfide conducts electricity when molten.

(1)

.....

.....

(ii) Explain why potassium sulfide has a high melting point.

(3)

.....

.....

.....

.....

.....

.....

.....

(Total for Question 6 = 7 marks)

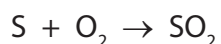


BLANK PAGE

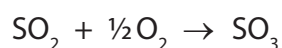


7 Sulfuric acid can be manufactured from sulfur in a four-stage process.

stage 1 sulfur is burned in air to form sulfur dioxide



stage 2 the sulfur dioxide is reacted with more oxygen to form sulfur trioxide



stage 3 the sulfur trioxide is absorbed in concentrated sulfuric acid to make oleum



stage 4 the oleum is carefully diluted with water to form sulfuric acid

(a) Write a chemical equation for the formation of sulfuric acid from oleum.

(1)

(b) A mass of 80 tonnes of sulfur is reacted with oxygen in stage 1.

Calculate the maximum mass, in tonnes, of sulfur trioxide that can be produced in stage 2.

[1 tonne = 1.0×10^6 g]

(3)

maximum mass =tonnes



(c) Calculate the minimum volume at rtp, in cubic decimetres (dm^3), of oxygen required to completely react with 64 tonnes of sulfur dioxide.

[1 mol of oxygen at rtp has a volume of 24 dm^3]

(2)

volume of oxygen = dm^3

(Total for Question 7 = 6 marks)



8 A student is supplied with aqueous solutions of these substances.

- bromine
- chlorine
- iodine
- potassium bromide
- potassium chloride
- potassium iodide

Describe two experiments the student could perform, using some of the solutions, to show the order of reactivity of bromine, chlorine and iodine.

Your answer should include the observations that the student would expect to make, and a chemical equation for one of the reactions.

(5)

.....

.....

.....

.....

.....

.....

.....

.....

.....

.....

.....

.....

.....

.....

.....

.....

.....

.....

.....

.....

.....

.....

.....

(Total for Question 8 = 5 marks)

BLANK PAGE



9 Nitrogen dioxide (NO₂) is a brown gas.

Dinitrogen tetroxide (N₂O₄) is a colourless gas.

The two gases can exist together in dynamic equilibrium according to the equation



A mixture of nitrogen dioxide gas and dinitrogen tetroxide gas is allowed to reach equilibrium in a sealed container at 20°C. This equilibrium mixture is brown in colour.

(a) The sealed container is immersed in hot water at 60°C.

As the temperature of the gas mixture increases, the pressure of the gas mixture also increases.

(i) Predict the effect of the increase in temperature on the position of equilibrium.

(1)

(ii) Predict the effect of the increase in pressure on the position of equilibrium.

(1)

(iii) Suggest why it is difficult to predict which way the equilibrium will shift.

(1)



(b) Suggest why the equilibrium mixture is a darker shade of brown at 60°C than the equilibrium mixture at 20°C.

(2)

.....

.....

.....

.....

(Total for Question 9 = 5 marks)

TOTAL FOR PAPER = 60 MARKS



BLANK PAGE

